





THỬ THÁCH 2

TỰ LUẬN

10. Tính rồi tô màu theo ý thích của em.



11. Đặt tính rồi tính.

$$782 - 65$$

.....

.....

.....

$$628 - 354$$

.....

.....

.....

$$456 + 83$$

.....

.....

.....

$$537 + 291$$

.....

.....

.....

12. Tính.

$$69 + 26 - 37 = \dots\dots\dots$$

$$92 - 35 + 23 = \dots\dots\dots$$

$$634 + 95 - 546 = \dots\dots\dots$$

$$375 - 38 + 643 = \dots\dots\dots$$

13. >, <, = ?

$$28 + 5 \dots\dots 34$$

$$49 + 13 \dots\dots 60$$

$$540 + 60 \dots\dots 600$$

$$800 - 300 \dots\dots 490$$

$$36 + 15 \dots\dots 15 + 36$$

$$80 - 9 \dots\dots 92 - 14$$

$$380 - 120 \dots\dots 250 + 150$$

$$730 - 50 \dots\dots 810 - 130$$

