


Toán – Tuần 9
Thứ – Ngày.....

1 Tính nhẩm:

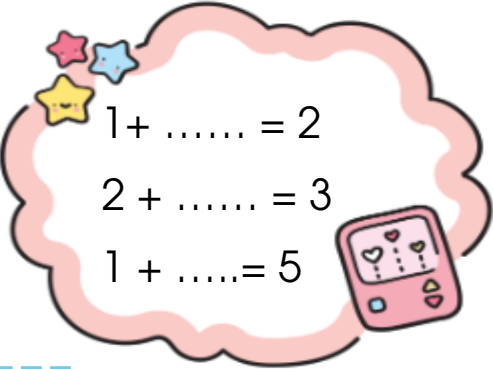
$5 + 0 = \dots\dots$ $2 + 4 = \dots\dots$
 $0 + 4 = \dots\dots$ $4 + 3 = \dots\dots$
 $1 + 5 = \dots\dots$ $3 + 1 = \dots\dots$

$1 + 2 + 2 = \dots\dots$
 $0 + 4 + 2 = \dots\dots$
 $5 + 0 + 3 = \dots\dots$


2 Số?



$3 + \dots\dots = 4$
 $\dots\dots + 1 = 5$
 $2 + \dots\dots = 4$



$1 + \dots\dots = 2$
 $2 + \dots\dots = 3$
 $1 + \dots\dots = 5$

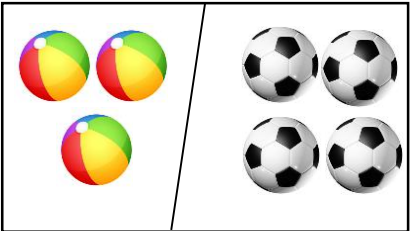
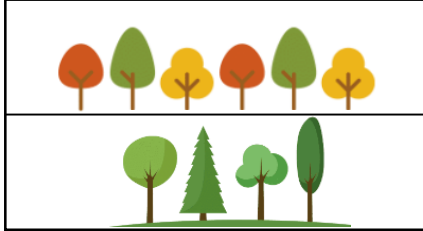



$3 + 1 + \dots\dots = 5$
 $1 + 2 + \dots\dots = 6$
 $2 + 0 + \dots\dots = 4$

3 Điền dấu <, >, =


$1 + 4 \square 3$ $3 + 4 \square 7$
 $5 + 3 \square 6$ $6 + 3 \square 9$
 $8 + 2 \square 7$ $5 + 2 \square 6$

4 Viết phép tính thích hợp

--	--	--	--	--	--	--	--	--	--

5 Hình bên:

Có..... 

Có..... 